

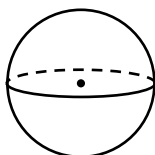
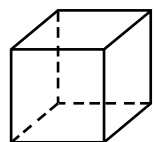
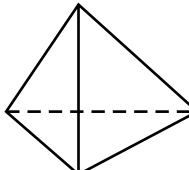
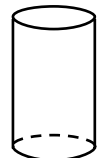
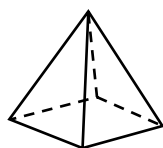
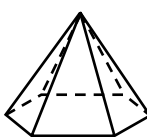
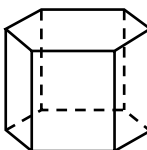
Figure It Out

Match each statement in Column 1 with the figure it describes in Column 2. Then write the letter above the corresponding exercise number to solve the riddle.

Column 1

1. This figure has 6 edges.
2. This figure has 2 bases but no faces.
3. This figure has 4 vertices.
4. This figure has 18 edges.
5. This figure has 6 faces.
6. This figure has 8 vertices.
7. This figure has 8 edges.
8. This figure has no faces and no bases.
9. This figure has 4 more edges than vertices.
10. This figure has 5 vertices.
11. This figure has 12 vertices.
12. This figure has 7 faces.

Column 2

- C. 
- E. 
- F. 
- I. 
- N. 
- S. 
- T. 

What is the difference between a brand new quarter and a very old dime?

1 2 3 4 5 6 7 8 9 10 11 12