
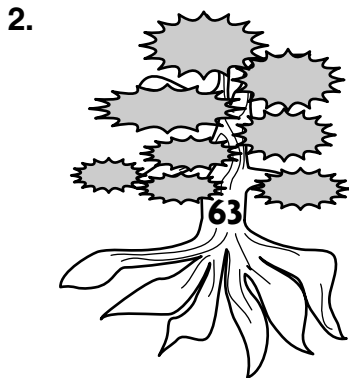


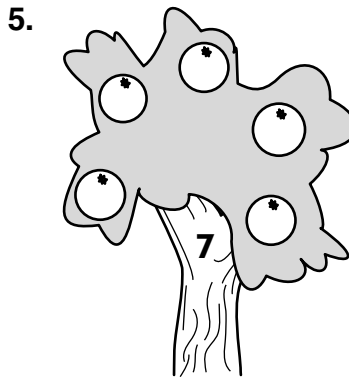



Factor and Multiple Trees

Each exercise shows a tree with a number written on its trunk. Fill in the factors of that number on the ends of the tree's roots.



Each exercise shows a tree with a number written on its trunk. Fill in the first five multiples of the number on the tree's fruit.



Each exercise shows a tree with a number written on its trunk. Fill in the factors of that number on the ends of the tree's roots. Then fill in the first five multiples of the number on the tree's fruit.

